

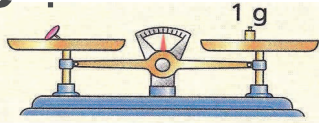
Prénom : _____

Date : _____


Mesure : Les masses

1 Observe :

1 gramme
1 g



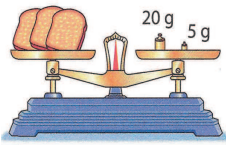
1 g, c'est lourd comme une punaise.



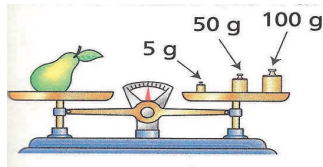
1 kilogramme
1 kg

1 kg, c'est lourd comme 1 litre d'eau.


Ecris la masse de chaque objet :



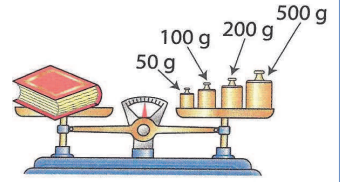
..... g



..... g



..... g




..... g

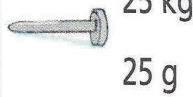
2 Entoure la masse de chaque objet :



25 kg
25 g



300 kg
300 g



25 kg
25 g



29 kg
29 g



500 kg
500 g

3 Complète avec la masse qui convient :

13 kg

1 kg

190 kg

75 kg



..... kg



..... kg



..... kg



..... kg


4 Numérote les enfants du plus léger au plus lourd :



35 kg



27 kg



43 kg



48 kg



37 kg

